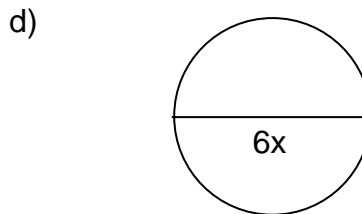
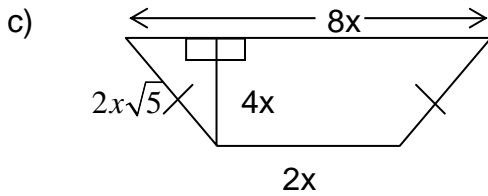
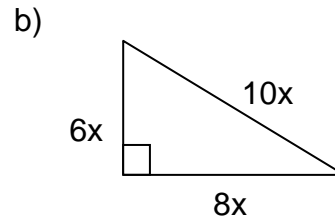
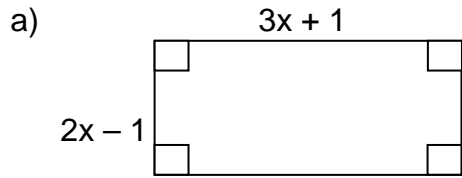
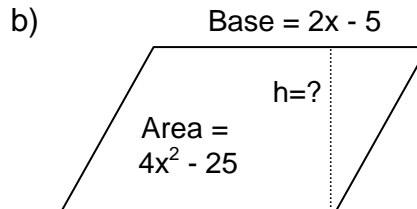
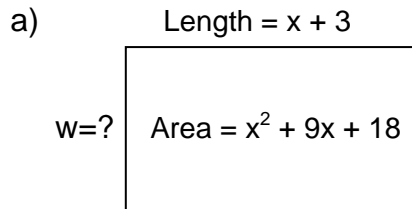


WEEK 1 - ALGEBRA-GEOMETRY CONNECTIONS

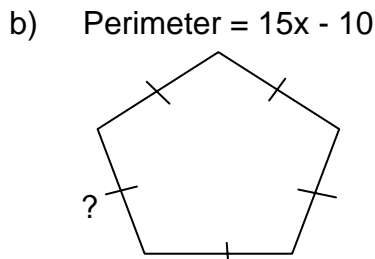
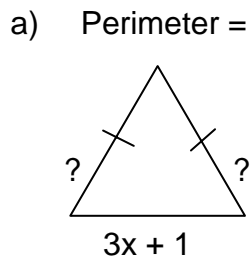
1. Find the perimeter/circumference and area of each of the following shapes:



2. Given the area of each figure, find the missing dimension(s):



3. Given the perimeter of each figure, find the missing dimension(s):



4. For each problem, assume the two lines are parallel. Find x and the measures of the angles that contain x .

